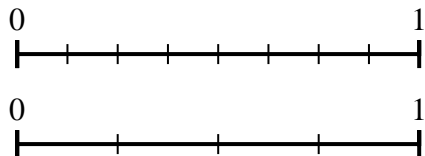




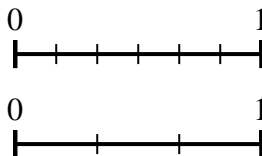
Use the number lines to answer the questions.

Answers

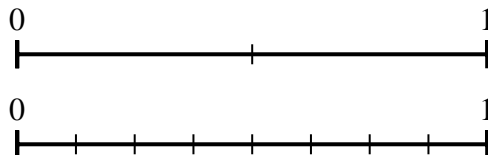
1) Using the number lines shown, what is the equivalent fraction to $\frac{4}{8}$?



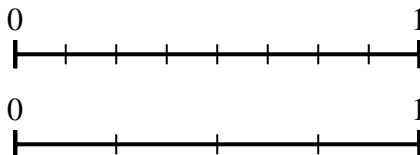
2) Using the number lines shown, what is the equivalent fraction to $\frac{2}{6}$?



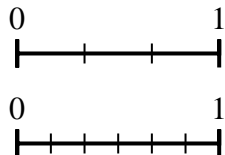
3) Using the number lines shown, what is the equivalent fraction to $\frac{1}{2}$?



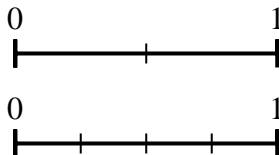
4) Using the number lines shown, what is the equivalent fraction to $\frac{2}{8}$?



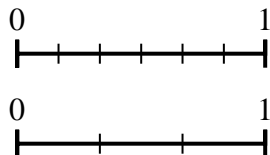
5) Using the number lines shown, what is the equivalent fraction to $\frac{3}{3}$?



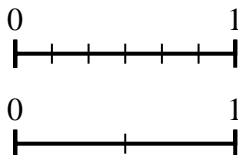
6) Using the number lines shown, what is the equivalent fraction to $\frac{1}{2}$?



7) Using the number lines shown, what is the equivalent fraction to $\frac{4}{6}$?



8) Using the number lines shown, what is the equivalent fraction to $\frac{0}{6}$?

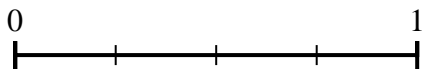
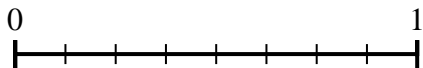


1. _____
2. _____
3. _____
4. _____
5. _____
6. _____
7. _____
8. _____

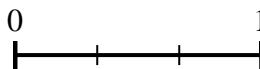
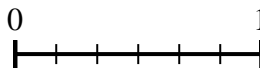


Use the number lines to answer the questions.

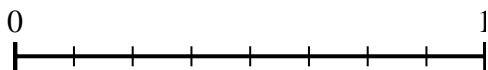
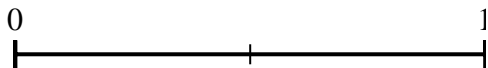
1) Using the number lines shown, what is the equivalent fraction to $\frac{4}{8}$?



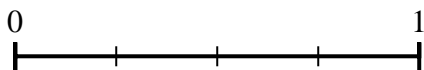
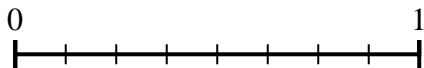
2) Using the number lines shown, what is the equivalent fraction to $\frac{2}{6}$?



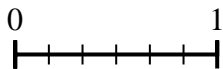
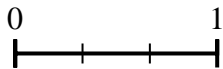
3) Using the number lines shown, what is the equivalent fraction to $\frac{1}{2}$?



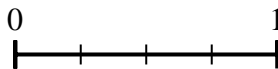
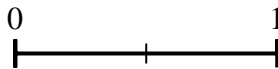
4) Using the number lines shown, what is the equivalent fraction to $\frac{2}{8}$?




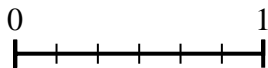
5) Using the number lines shown, what is the equivalent fraction to $\frac{3}{3}$?



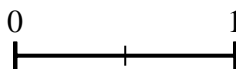
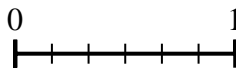
6) Using the number lines shown, what is the equivalent fraction to $\frac{1}{2}$?



7) Using the number lines shown, what is the equivalent fraction to $\frac{4}{6}$?



8) Using the number lines shown, what is the equivalent fraction to $\frac{0}{6}$?



Answers

1. $\frac{2}{4}$

2. $\frac{1}{3}$

3. $\frac{4}{8}$

4. $\frac{1}{4}$

5. $\frac{6}{6}$

6. $\frac{2}{4}$

7. $\frac{2}{3}$

8. $\frac{0}{2}$



Use the number lines to answer the questions.

1)

2)

3)

4)

5)

6)

7)

8)

Answers

1. _____

2. _____

3. _____

4. _____

5. _____

6. _____

7. _____

8. _____